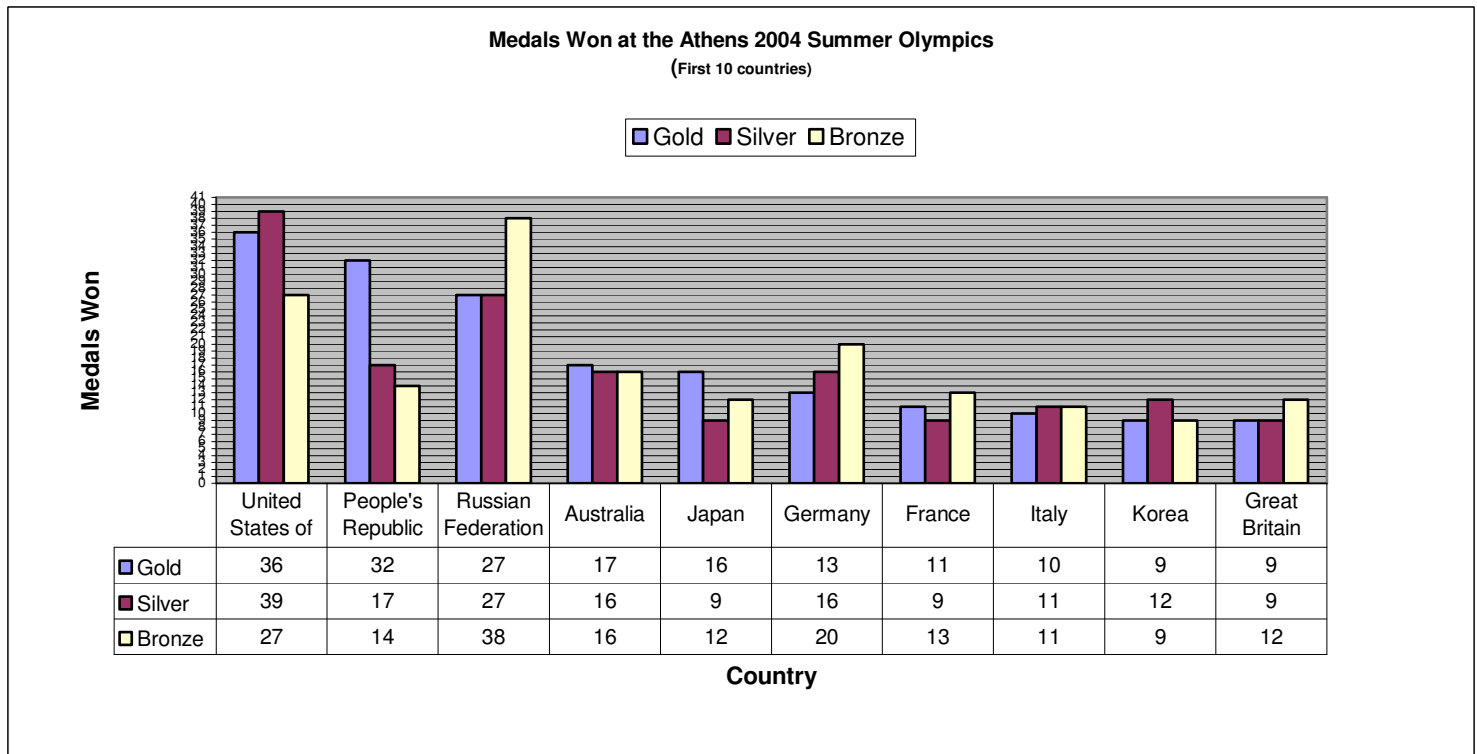


Summer Olympics Athens 2004

Using the graph and table below answer the following questions:

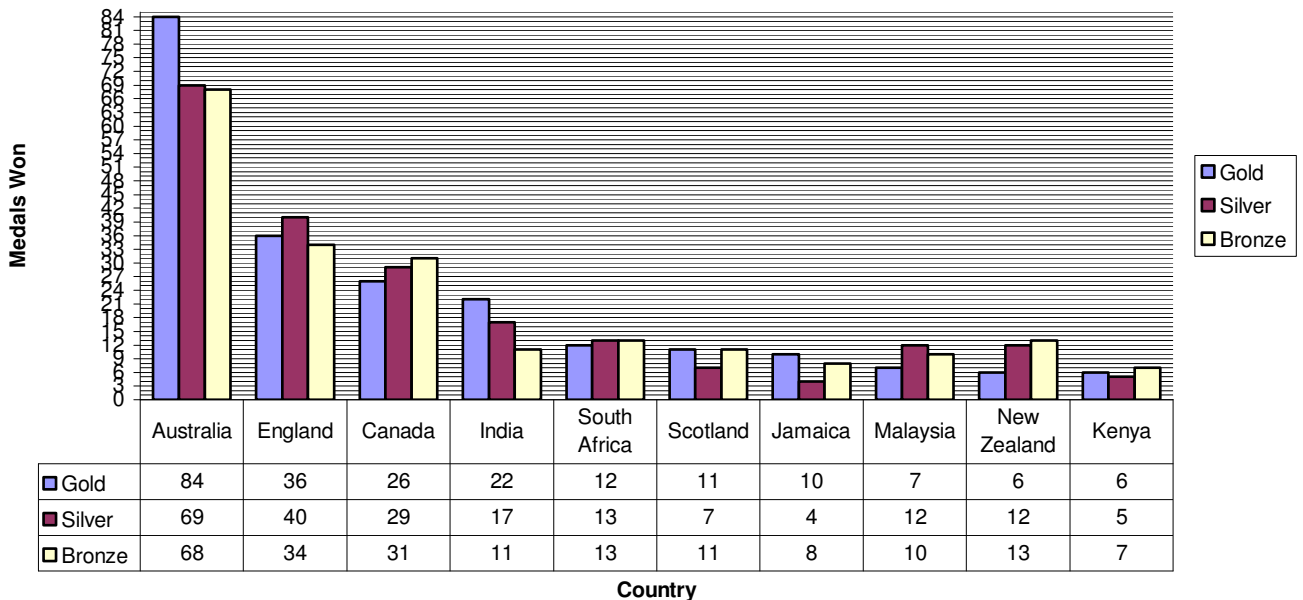


1. Which country won the most gold medals at the 2004 Olympics?
2. Which country won the most silver medals in the 2004 Olympics?
3. Which country won the most bronze medals in the 2004 Olympics?
4. How many countries won 9 silver medals? Which countries were they?
5. Which country won 16 silver medals and 16 bronze medals?
6. Which country won 9 gold medals and 9 silver medals?

Commonwealth Games Melbourne 2006

Using the graph and table below answer the following questions:

Medals Won Commonwealth Games Melbourne 2006
(First 10 Countries)

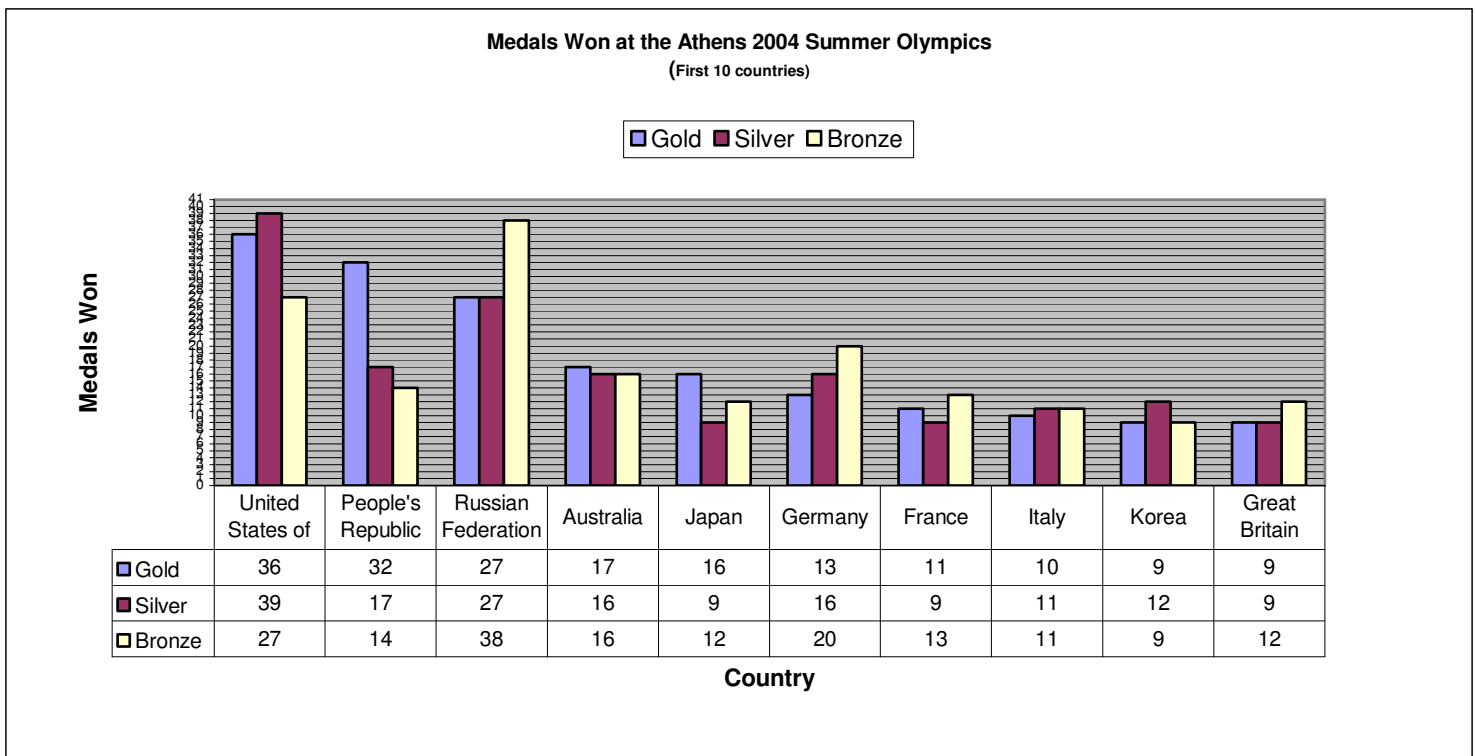


1. Which country won the most gold, silver and bronze medals?
2. What is the difference between the number of gold medals won by Australia and England?
3. Which country won 22 gold medals?
4. How many countries won 6 gold medals? Which countries were they?
5. Which country won the same number of gold and bronze medals?

Answer Sheets

Summer Olympics Athens 2004

Using the graph and table below answer the following questions:



7. Which country won the most gold medals at the 2004 Olympics?

United States of America

8. Which country won the most silver medals in the 2004 Olympics?

United States of America

9. Which country won the most bronze medals in the 2004 Olympics?

Russian Federation

10. How many countries won 9 silver medals? Which countries were they?

3 Countries – Japan, France, and Great Britain

11. Which country won 16 silver medals and 16 bronze medals?

Australia

12. Which country won 9 gold medals and 9 silver medals?

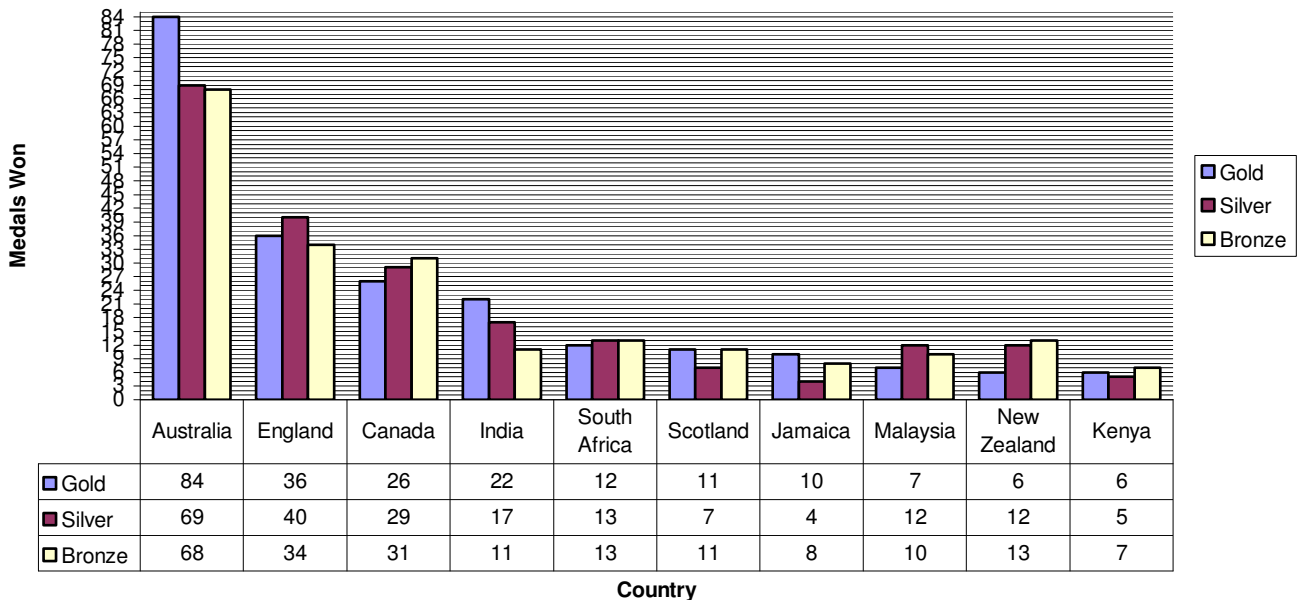
Great Britain



Commonwealth Games Melbourne 2006

Using the graph and table below answer the following questions:

Medals Won Commonwealth Games Melbourne 2006
(First 10 Countries)



1. Which country won the most gold, silver and bronze medals?

Australia

2. What is the difference between the number of gold medals won by Australia and England?

48

3. Which country won 22 gold medals?

India

4. How many countries won 6 gold medals? Which countries were they?

New Zealand and Kenya

5. Which country won the same number of gold and bronze medals?

Scotland

