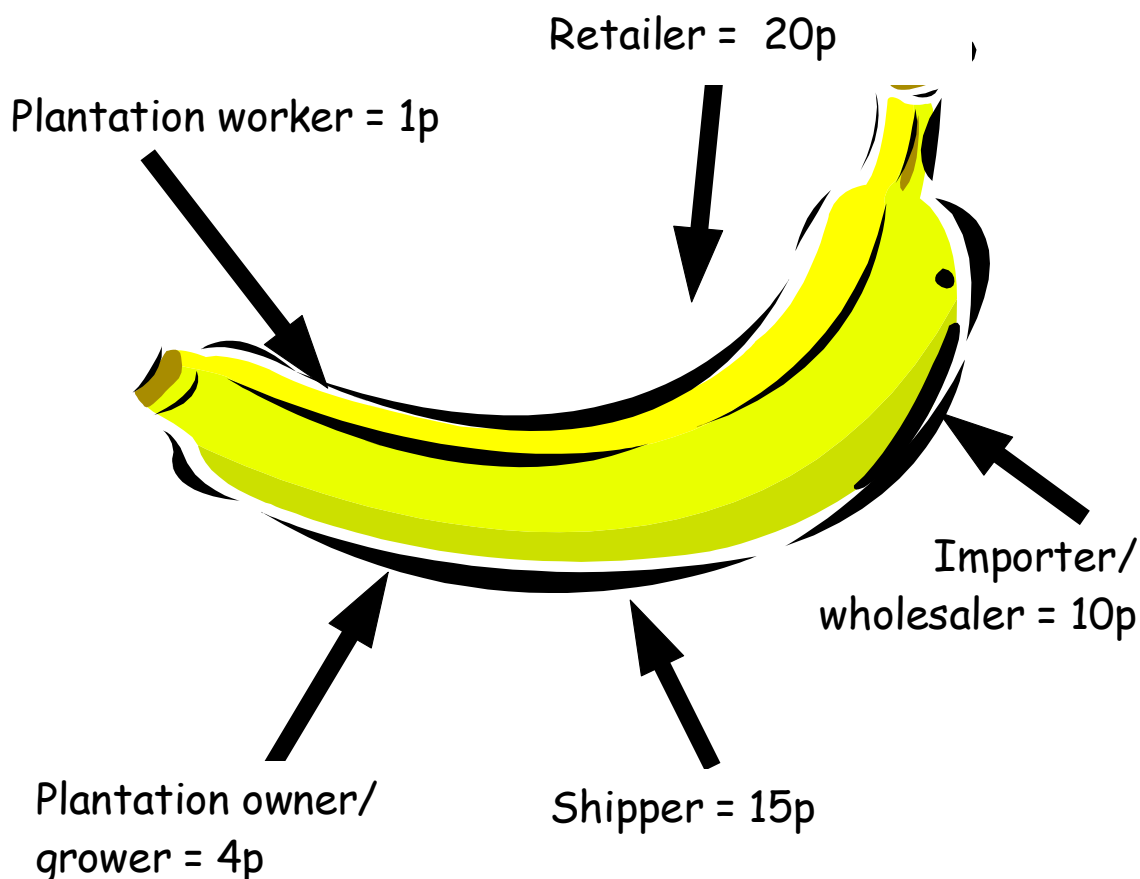


Fairtrade Fractions

Calculate half of this 50p banana

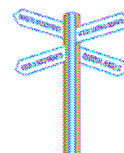
Write half ($\frac{1}{2}$) next to the sum of money which is nearest to your answer



Calculate a quarter of this 50p banana

Write quarter ($\frac{1}{4}$) next to the sum of money which is nearest to your answer

Source: Go Bananas - Oxfam. Figures have been rounded to the nearest whole pence.

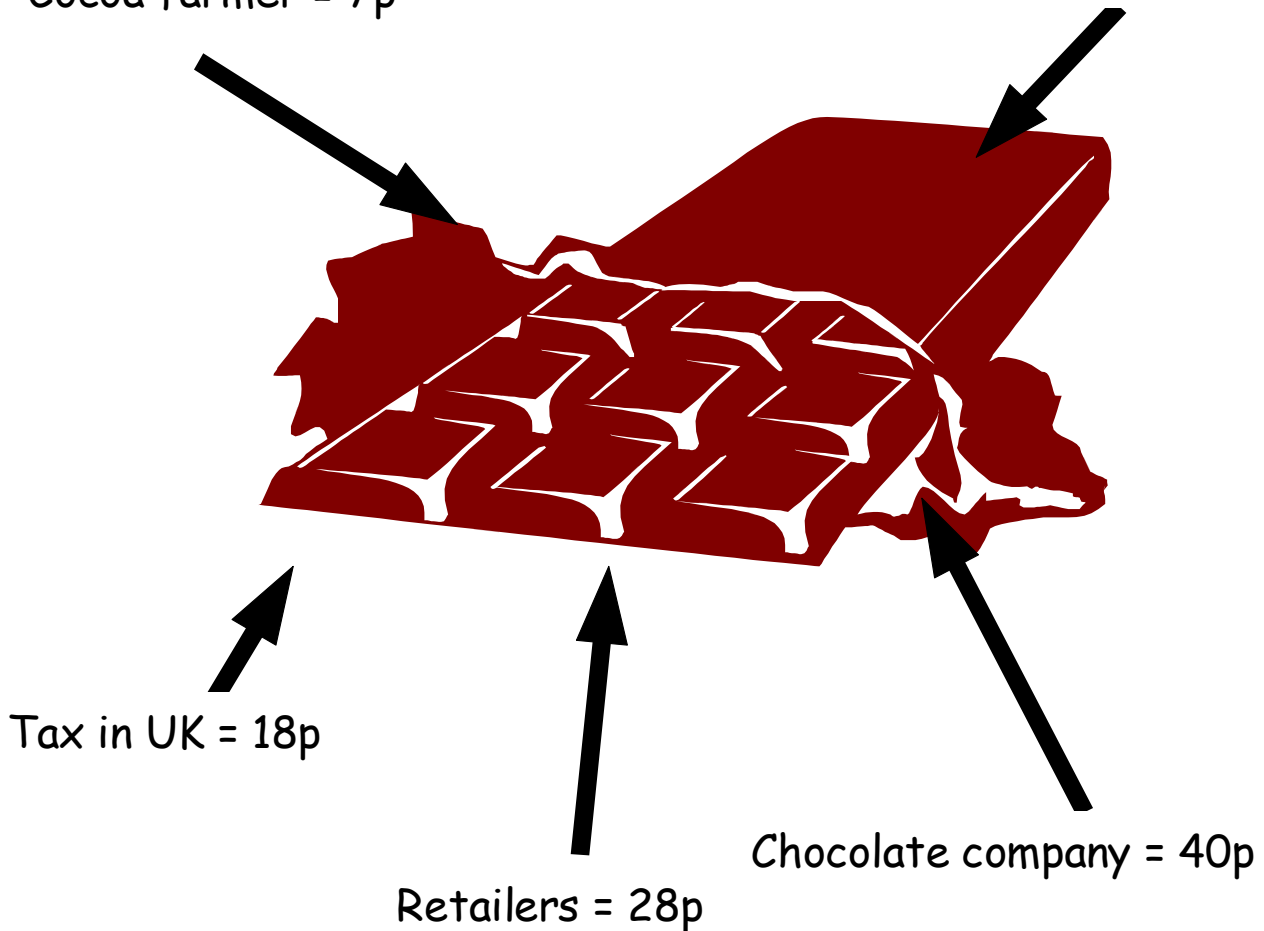


Calculate half of this £1.00 bar of chocolate

Write half ($\frac{1}{2}$) next to the sum of money which is nearest to your answer

Cocoa farmer = 7p

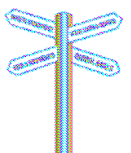
Tax in Ghana = 7p



Calculate a quarter of this £1.00 bar of chocolate

Write quarter ($\frac{1}{4}$) next to the sum of money which is nearest to your answer

Source: Oxfam's Cool Planet website Figures have been rounded to the nearest whole pence.



Calculate half of this £2.00 jar of coffee



Write half ($\frac{1}{2}$) next to the sum of money which is nearest to your answer

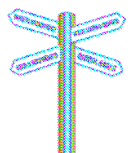


Calculate a quarter of this £2.00 jar of coffee



Write quarter ($\frac{1}{4}$) next to the sum of money which is nearest to your answer

Source: The Coffee Chain Game (Oxfam) Figures have been rounded to the nearest whole pence.




Calculate half of this £40.00 pair of jeans

Answer box for the first calculation.

Write half ($\frac{1}{2}$) next to the sum of money which is nearest to your answer

Company running costs /profit = £6

Materials = £7



Labour = £5

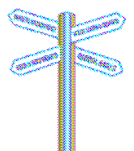
Profit for the shop = £22

Calculate a quarter of this £40.00 pair of jeans

Answer box for the second calculation.

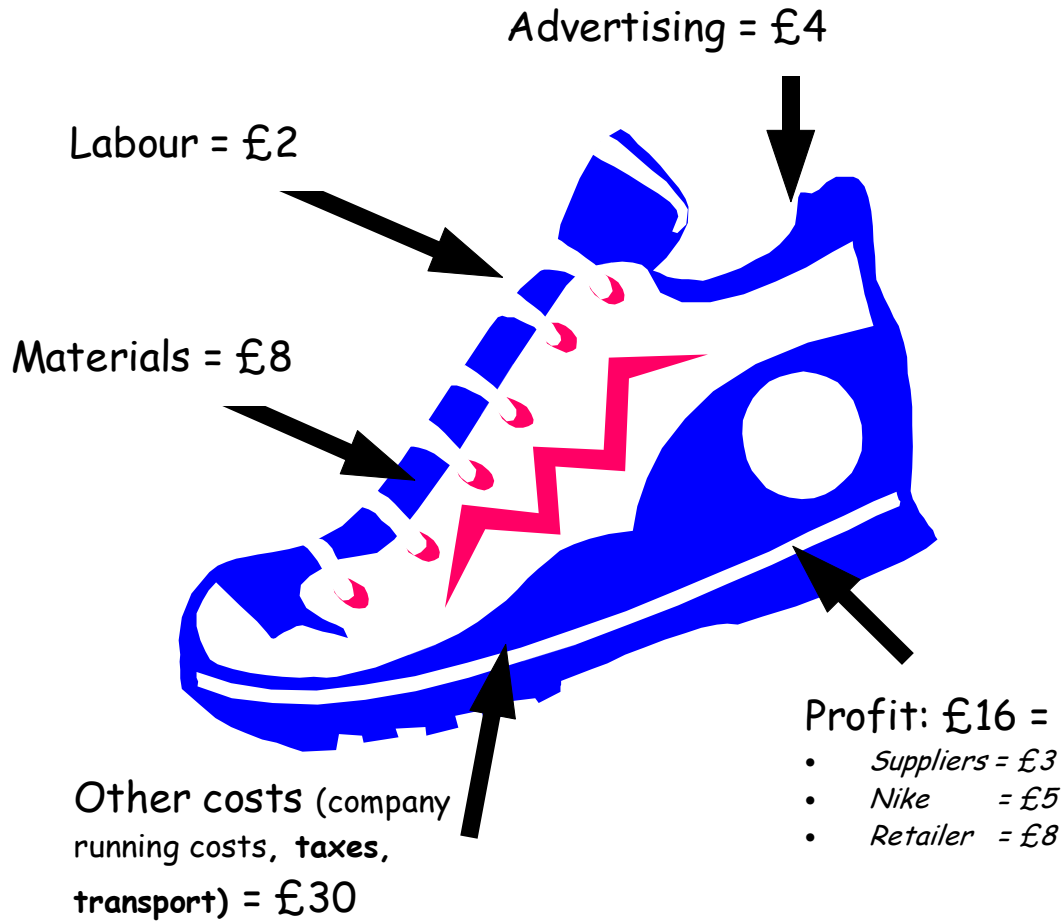
Write quarter ($\frac{1}{4}$) next to the sum of money which is nearest to your answer

Source: New Internationalist Magazine 322. www.newint.org - click on back issues
Figures have been rounded to the nearest whole pound.



Calculate half of this £60.00 pair of Nike trainers

Write half ($\frac{1}{2}$) next to the sum of money which is nearest to your answer



Calculate a quarter of this £60.00 pair of Nike trainers

Write quarter ($\frac{1}{4}$) next to the sum of money which is nearest to your answer

Source: Just Biz website "Exposed" www.jusbiz.org/resources/Exposed.html

Figures have been rounded to the nearest whole pound.

